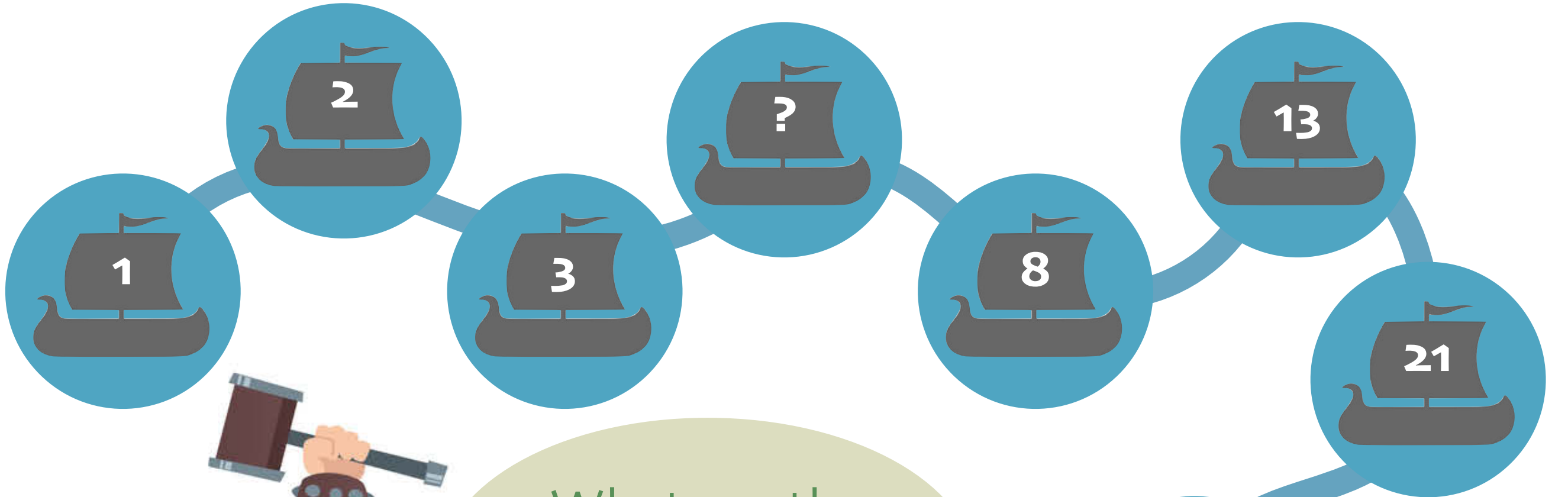


The Vikings

Come and solve
these tricky Viking
brain teasers!

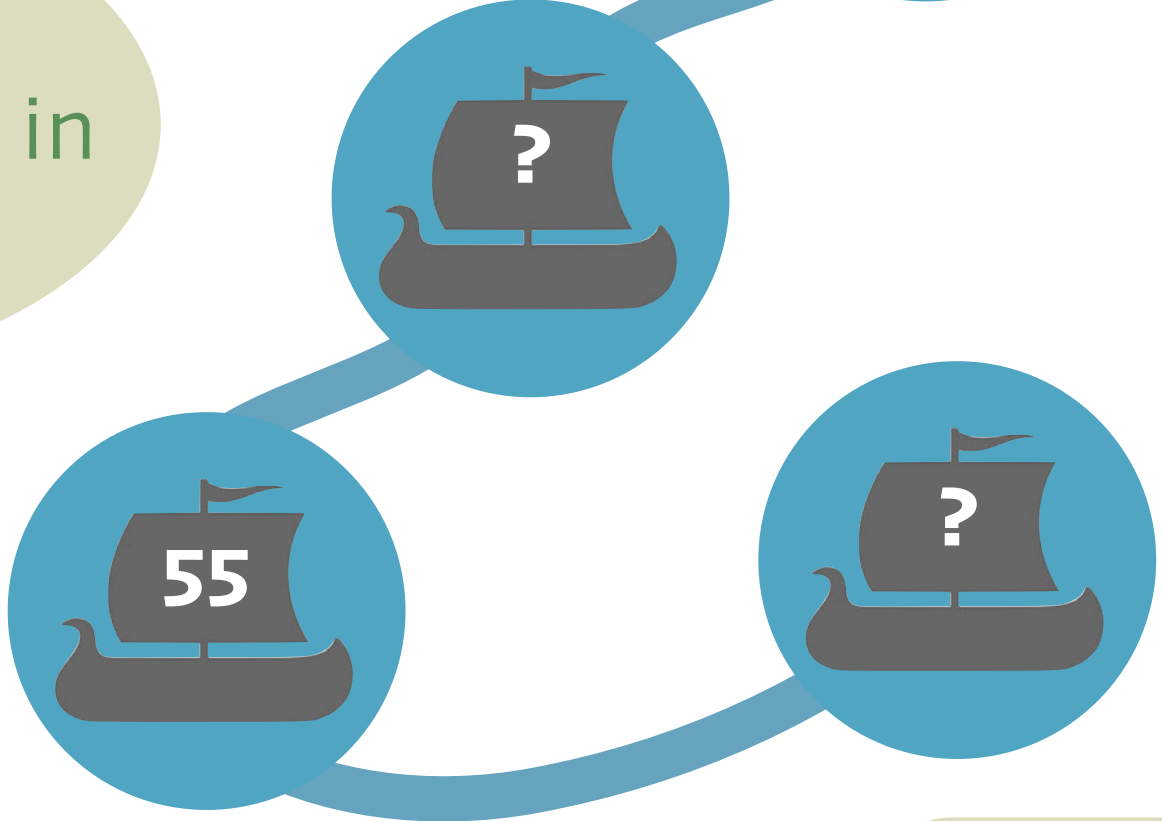


NEXT




What are the missing numbers in this sequence?

Can you work out the rule?



BACK

NEXT



Did you get that right?

You had to add together the two previous numbers to get the next number!

BACK

NEXT



The Vikings came from **Scandinavia**, which is made up of three countries: Norway, Sweden and Denmark.



How many different words can you make from this word? You can only use each letter once per word!

SCANDINAVIA

For example, you can make the word 'sand':

SCANDINAVIA



BACK

NEXT

SCANDINAVIA

scan

din

dins

vain

can

cans

said

and

via

in

an

avid

sin

sad

India



Did you think of any of these words?
What others did you find?

BACK

NEXT



A	B	C	D	E	F	G	H	I	J	K	L	M
N	O	P	Q	R	S	T	U	V	W	X	Y	Z

↑ H M P I H I t X S X F P M

H S * R M S I I H M

S t R ↑, I H M K F t M

S < R F * t J.

Can you translate these Viking runes to crack the code?



BACK

NEXT



A	B	C	D	E	F	G	H	I	J	K	L	M
N	O	P	Q	R	S	T	U	V	W	X	Y	Z

THE VIKINGS GAVE

US WORDS LIKE

SNORT, LUMP AND

SCRAWNY.

Well done!



BACK

NEXT

			= 40
---	---	---	------



			= 31
---	---	---	------

			= 40
--	--	--	------

=
45

=
25

=
41

			= 62
---	---	---	------

			= 41
---	---	---	------

			= 37
--	--	--	------

=
57

=
36

=
47

Can you work out the number each symbol represents?

Each row and column adds up to the total shown.

One number has been given to get you started!



 = 10	 = ?	 = ?	 = ?	 = ?	 = ?	 = ?	 = ?
---	---	---	---	---	---	---	---

BACK

NEXT

$$= 40$$

$$= 31$$

$$= 40$$

$$= 45$$

$$= 25$$

$$= 41$$

$$= 62$$

$$= 41$$

$$= 37$$

$$= 57$$

$$= 36$$

$$= 47$$



That was tricky! Well done if you got those right!

$$= 10$$

$$= 20$$

$$= 12$$

$$= 7$$

$$= 6$$

$$= 25$$

$$= 15$$

$$= 5$$

BACK

NEXT

Each letter of the alphabet has been given a value.

A	B	C	D	E	F	G	H	I	J	K	L	M
1	2	3	4	5	6	7	8	9	10	11	12	13
N	O	P	Q	R	S	T	U	V	W	X	Y	Z
14	15	16	17	18	19	20	21	22	23	24	25	26

For example, my name is **Sven** so my name has a value of **60**:

$$S=19, V=22, E=5, N=14$$

$$19+22+5+14=60$$

Which of these Norse gods and goddesses has the highest value in their name?

Odin

Frigg

Thor

Balder

Vidar

Loki



BACK

NEXT

A	B	C	D	E	F	G	H	I	J	K	L	M
1	2	3	4	5	6	7	8	9	10	11	12	13
N	O	P	Q	R	S	T	U	V	W	X	Y	Z
14	15	16	17	18	19	20	21	22	23	24	25	26

Which of these Norse gods and goddesses has the highest value in their name?

Odin
= 42

Frigg
= 47

Thor
= 61

Balder
= 42

Vidar
= 54

Loki
= 47

Thor's name has the highest value!
Well done!



BACK

NEXT



How many adjectives, verbs and adverbs can you think of to describe this picture?


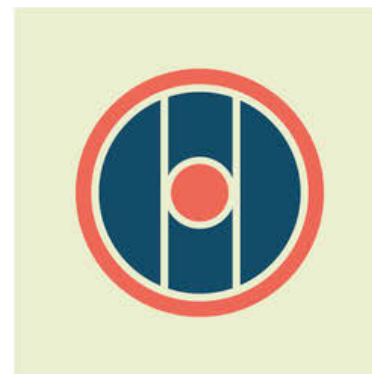


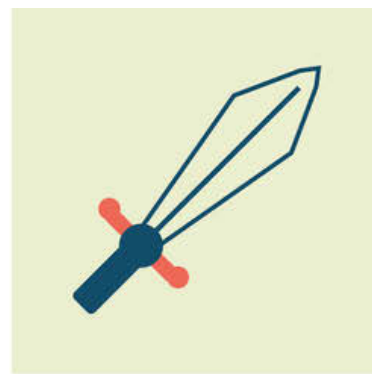





Write a list!



BACK

NEXT





Memorise as many of these Viking objects as you can. I'm going to take away two of them...










Don't rely on the position of the objects; they might move!

BACK

NEXT








Which two
are
missing?




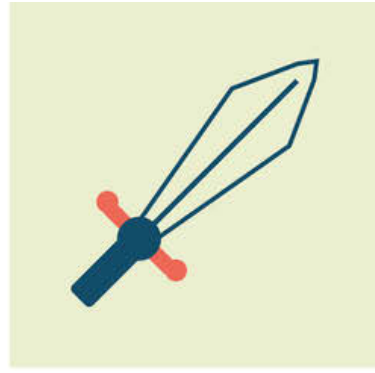



BACK

NEXT





It was the horn and the spear!



BACK

NEXT

